

DAV PUBLIC SCHOOLS, BHUBANESWAR
ANNUAL EXAMINATION, 2021-22
CLASS-VII

SUBJECT- SOCIAL SCIENCE (OBJECTIVE)

Time- 1hr 30 mins

Maximum Marks: 40

GENERAL INSTRUCTIONS:

- 1. There are 40 questions in all.**
- 2. All questions are compulsory.**
- 3. Each question carries 1 mark.**
- 4. Choose the most appropriate answer from the given options for each question.**

1. The layer of _____ is the densest layer of atmosphere.
 - A. Troposphere
 - B. Stratosphere
 - C. Mesosphere
 - D. Thermosphere
2. Pine, fir and spruce species of trees are the examples of _____ forests.
 - A. tropical hardwood forests
 - B. tropical evergreen forests
 - C. temperate softwood forests
 - D. temperate thorny forests
3. The credit of the founding of Muslim empire in India goes to _____ .
 - A. Mahmud Ghazni
 - B. Muhammad Ghori
 - C. Babur
 - D. Qutubuddin Aibe
4. Firoz Shah built an observatory in _____ .
 - A. Daulatabad
 - B. Bidar
 - C. Gulbarga
 - D. Berar

5. _____ has a bicameral legislature which consists of two houses , the Vidhan Sabha and Vidhan Parishad .

- A. Maharashtra
- B. Madhya Pradesh
- C. Rajasthan
- D. Haryana

6. The government ensures the distribution of rice, wheat , sugar and kerosene at a reasonable rate for the poor under the .

- A. Sukanya Samrudhi Yojna
- B. Pradhanmantri Ujjwala Yojana
- C. Pradhan Mantri Fasal Bima Yojana
- D. Public Distribution System

7. Different values, attitudes and behaviors that are attached to the role of males and females by different social and cultural groups is called as .

- A. Caste
- B. Sex
- C. Gender
- D. Religion

8. It is the unit to measure the air pressure.

- A. Milligram
- B. Millibar
- C. Millimeters
- D. Millilitre

9. Type of settlement where houses are spaced far apart and often interspersed with fields.

- A. Compact settlement
- B. Dispersed settlement
- C. Metropolitan city
- D. Town

10. In the Vijayanagar Empire the very high gateways attached to the temples known as-

- A. Kalyan Mandap
- B. Gopuram
- C. Natya Mandap
- D. Shikhara

11. One-fourth of the land revenue collected in return of the protection of the territories which were under indirect control of the Maratha king .

- A. Chauth
- B. Sardeshmukhi
- C. Jazia
- D. Tithe

12. The most important functionary of the State Government.

- A. President
- B. Governor
- C. Prime Minister
- D. Chief Minister

13. This is the market where a customer can get the goods on credit. So, the payment can be made at a later date as per the convenience of the customer.

- A. Wholesale market
- B. Retail market
- C. Neighborhood shop
- D. Weekly market

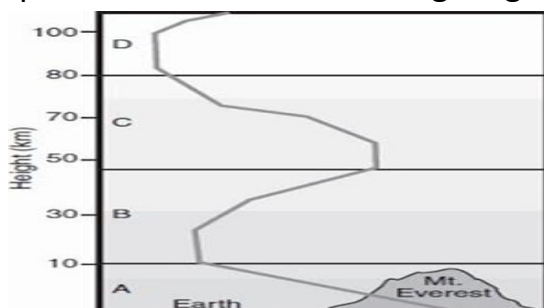
14. The dust particles act as hygroscopic nucleus around which water vapours get condensed to form clouds.

- A. TRUE
- B. FALSE

15. If you plan to visit tropical deciduous forests of eastern Brazil, you will land between 10 degree south to 23.5 degree south latitudes.

- A. TRUE
- B. FALSE

16. Mughal painting reached its zenith during the reign of Jahangir.
 A. TRUE
 B. FALSE
17. The Finance Minister of Maharaja Ranjit Singh was Fakir Azizuddin
 A. TRUE
 B. FALSE
18. Surdas took the ideas of Bhakti to the North .
 A. TRUE
 B. FALSE
19. Gender discrimination is the basic principle of Democracy .
 A. TRUE
 B. FALSE
20. Education and awareness has empowered the woman to emerge as a powerful force in political and economic sphere.
 A. TRUE
 B. FALSE
21. Which of the statement is incorrect in context of the red soil in India?
 A. The soil is red in colour due to the presence of iron oxide particles.
 B. This type of soil is confined to peninsular India.
 C. This type of soil has the ability to retain moisture
 D. It is highly porous and fine- grained
22. Look at the given diagram carefully and find out what happens to the temperature with the increasing height in the layer C ?



- A. Increases
 B. Decreases
 C. Remains constant
 D. Remains proportional

23. Match the columns:

A	B
1. Wet point settlements	i. Zaire Basin
2. Tourism - based town	ii. Nainital
3. Economically backward region	iii. Jagadishpur
4. Natural gas pipeline	iv. Desert areas

Select the correct matching.

1-ii, 2-iii, 3-i, 4-iv

1-iv, 2-ii, 3-i, 4-iii

1-i, 2-ii, 3-iii, 4-iv

1-ii, 2-iv, 3- iii, 4-i

24. Consider the following

Assertion (A)- The phenomenon of monsoon is a good example of seasonal winds.

Reason(R) - These winds flow from high pressure area to low pressure area due to unequal heating of land and water.

Read both the above statement carefully and choose the correct alternative.

- A. Both A and R are true and R is the correct explanation of A.
- B. Both A and B are true but R is not the correct explanation of A.
- C. A is correct but R is wrong.
- D. A is wrong but R is correct.

25. Consider the following

Assertion (A) - In the post stone age, the concept of settled life came into being gradually.

Reason (R) - Humans learnt the art of agriculture and farming.

Read both the above statement carefully and choose the correct alternative.

- A. Both A and R are true and R is the correct explanation of A.
- B. Both A and B are true but R is not the correct explanation of A.
- C. A is correct but R is wrong.
- D. A is wrong but R is correct.

26. Identify the insect-eating animal and its habitat shown in the given image.



- A. Ant eater- equatorial region
 - B. Armadillos- equatorial region
 - C. Star- nosed mole- desert region
 - D. Gecko- desert region
27. The ruler of Mewar , who was considered as ' a king without a capital ' .
- A. Rana Kumbha
 - B. Rana Sangram Singh
 - C. Maharana Pratap
 - D. Rana Hamir
28. Suhrawardi order of Sufism was established by-
- A. Khwaja Muinnuddin
 - B. Shaikh Bahauddin Zakaria
 - C. Sheikh Salim Chisti
 - D. Khwaja Baqi Bittah
29. I believe in one God , I follow Shri Guru Granth Sahib and act in accordance with the message of Gurabani .
- Discover my religion .
- A. Hinduism
 - B. Sufism
 - C. Sikhism
 - D. Islam

30. The state having highest number of Member of Legislative Assembly .

- A. Goa
- B. Mizoram
- C. Rajasthan
- D. Uttar Pradesh

31. Which among the following is not a features of wholesale market?

- A. Buys directly from the producer or manufacturer.
- B. The wholesaler sells the goods in bulk.
- C. The wholesaler sells the goods in a higher price.
- D. The wholesalers supply goods to the retailers.

32. Match the columns.

A	B
1) Domestic maid	i) empowerment of women
2) Urban women	ii) basket making
3) Rural women	iii) working in offices
4) Education	iv) unhygienic life

Select the correct matching.

- A. 1-iv , 2- ii, 3- iii, 4-i
- B. 1- ii , 2- iv, 3- iii, 4-i
- C. 1- iii , 2- i, 3- iv, 4-ii
- D. 1- iv, 2- iii, 3-ii, 4-i

33. Consider the following

Assertion- (A) :Akbar was the first Mughal ruler to adopt a policy of religious tolerance .

Reason- (R): He imposed Jazia on Hindus .

Read both the above statement carefully and choose the correct alternative.

- A. Both A and R are true and R is the correct explanation of A.
- B. Both A and B are true but R is not the correct explanation of A.
- C. A is correct but R is wrong.
- D. A is wrong but R is correct.

34. Consider the following .

Assertion- (A): Bhakti saints believed in the worship of God, i.e. formless (Nirakar) , omnipresent and omnipotent .

Reason-(R): They denounced idol worship, discarded ritual and sacrifices to create oneness with God.

Read both the above statement carefully and choose the correct alternative.

- A. Both A and R are true and R is the correct explanation of A.
- B. Both A and B are true but R is not the correct explanation of A.
- C. A is correct but R is wrong.
- D. A is wrong but R is correct.

35. Consider the following

Assertion (A) : Social advertising has played an important role in making us aware of our responsibility towards the society .

Reason (R): Many companies distribute samples of their products free of cost to the customer, to 'hook' them to their product.

Read both the above statement carefully and choose the correct alternative.

- i. Both A and R are true and R is the correct explanation of A.
- ii. Both A and B are true but R is not the correct explanation of A.
- iii. A is correct but R is wrong.
- iv. A is wrong but R is correct.

36. Consider the following

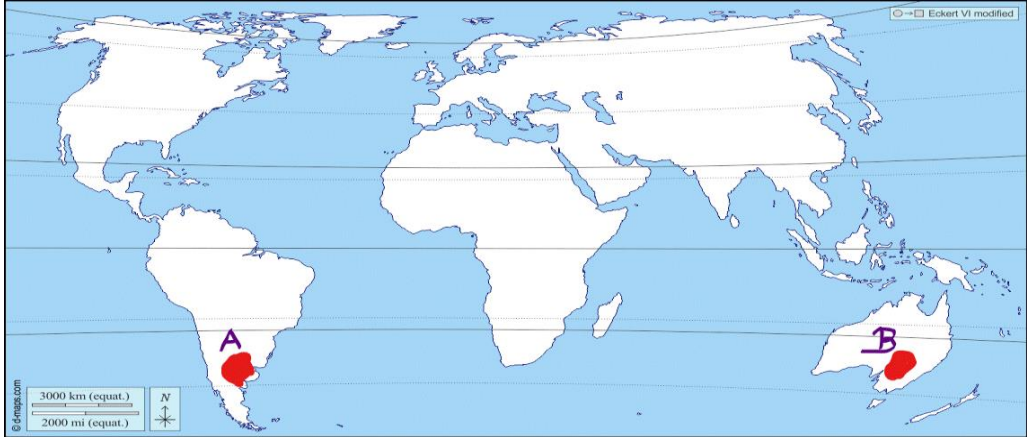
Assertion- (A) :The notion of stereotyping is generally positive.

Reason- (R): Stereotyping of gender roles may vary from culture to culture.

Read both the above statement carefully and choose the correct alternative.

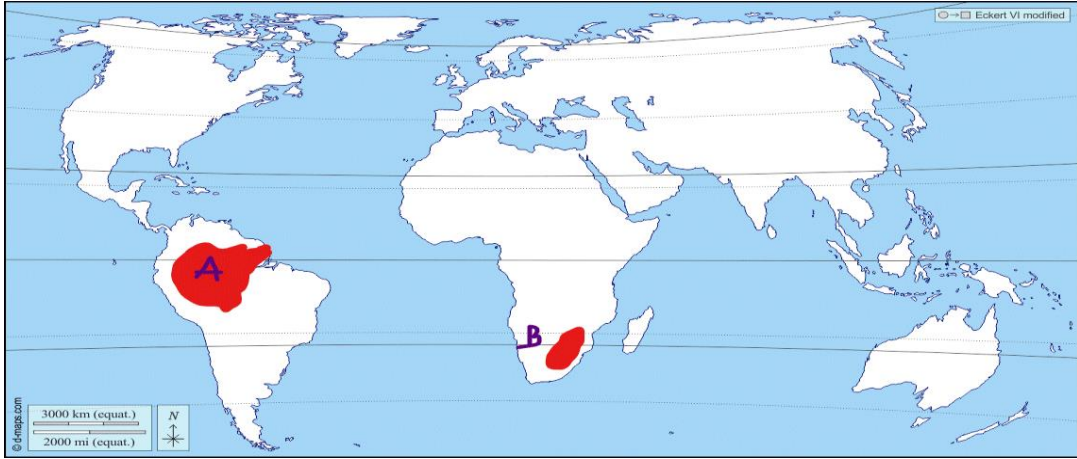
- i. Both A and R are true and R is the correct explanation of A.
- ii. Both A and B are true but R is not the correct explanation of A.
- iii. A is correct but R is wrong.
- iv. A is wrong but R is correct.

37. Identify the name of grasslands marked as A and B in the given map of the world.



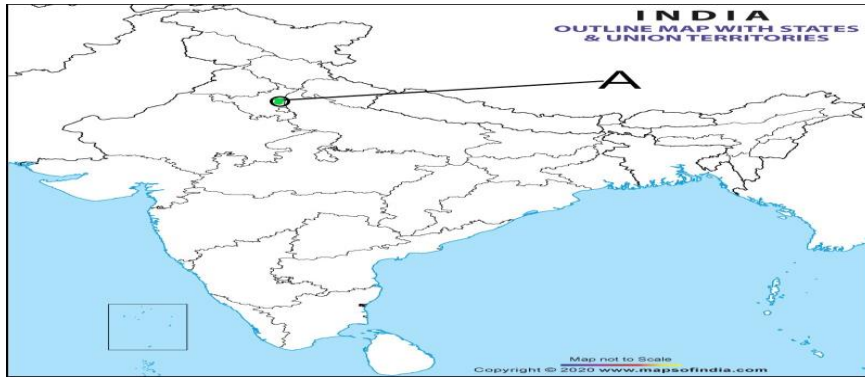
- i. A. Campos- Tropical grassland B. Savanna - Tropical grassland
- ii. A. Savanna - Tropical grassland B. Pampas - Temperate grassland
- iii. A. Pampas -Temperate grassland Downs -Temperate grassland
- iv. A. Pustaz- Temperate grassland B. Savanna - Tropical grassland

38. Identify the correct match of natural regions with their countries:



- i. A. Amazon forest- Argentina B. Velds- Egypt
- ii. A. Amazon forest- Brazil B. Velds - South Africa
- iii. A. Campos - Chile B. Sahara - Libya
- iv. A. Campos - Venezuela B. Sahara –Africa

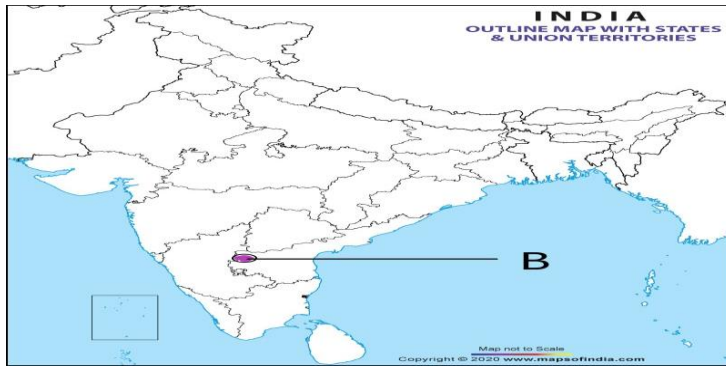
39. Identify the place located in the given map of India .



At this place the Mughals defeated Hemu , under the leadership of Bairam khan .

- A. Haldighat
- B. Panipat
- C. Khanwa
- D. Chittor

40. Identify the place located in the given map of India .



This Hindu state was established on the banks of the river Tungabhadra .

- A. Bahamani
- B. Vijaynagar
- C. Golconda
- D. Bikaner

DAV PUBLIC SCHOOLS, BHUBANESWAR

ANNUAL EXAMINATION, 2021-22

CLASS-VII

SUBJECT- SOCIAL SCIENCE (SUBJECTIVE)

Time- 1hr 30 mins

Maximum Marks: 40

GENERAL INSTRUCTIONS:

1. There are 17 questions in all.
2. All questions are compulsory.
3. Section A consists of 11 questions (Q. No.s 1 to 11) .Each question carries 2 marks .Write answers within 30- 40 words for each question.
4. Section B consists of 6 questions (Q.NO.S 12 to 17). Each question carries 3 Marks. Write answers within 60 - 80 words for each question

1. Identify the given image and explain the reason for its formation. (1+1=2)



2. Differentiate between hot deserts and cold deserts. (2)
3. Describe the role of communication networks in today's world. (2)
4. Discuss the climatic condition of Ganga- Brahmaputra basin. (2)
5. Find out the reason behind the invasion of India from north-west side by Mahmud Ghazni . State the most destructive attack of Mahmud Ghazni in India. (1+1=2)
6. Mention the factor that forced Humayun to leave India and moved towards Iran . How did he restore the Mughal empire once again ? (1+1=2)
7. List the steps taken by Saadat Khan to consolidate his position in Awadh .(Any two) (2)
8. Estimate the humanistic values of Sufism .(Any two) (2)
9. State any two negative effects of advertising. (2)
10. Distinguish between Professional inequality and Ownership inequality. (2)

11. Discuss the benefits of shopping in a weekly market .(Any two) (2)
12. Define soil. Describe the organic and inorganic components of soil. (1+2=3)
13. Identify the type of tree given in the image. Write the uses of these trees. (1+2=3)



14. Analyse the condition of women in Vijaynagar empire during the medieval period .(Any three) (3)
15. "Under Shah Jahan , the Deccan policy of the Mughals entered a new phase". Examine the statement by giving suitable arguments .(Any three) (3)
16. Define Consumerism. Write any two features of Consumerism. (1+2=3)
17. Elaborate any three functions of the State Legislature. (3)
