

## **HOLIDAYS HOME WORK 2021-22**

Dear children

Holidays are the time to increase your creativity. This is the time when your cognitive affective and psychomotor domains of learning can be nurtured and developed.

But again this summer break is a bit different. During these unprecedented times, we need to take care of ourselves and our elders too. Follow COVID appropriate behaviour, follow social distancing and do not move out of your homes. The holidays home work has been designed by keeping this in mind. You can do various other things too like help your mother in daily chores, do yoga and other physical exercises, spend quality time with grandparents at home and treasure these moments for lifetime.

*Stay home stay safe !!*

**SUMMER BREAK HOLIDAY HOMEWORK**

**ENGLISH**

**CLASS IV**

- 1. BOOK REVIEW ACTIVITY :** Choose any one novel written by the authors (any one) mentioned below and write a book review about the same on an A4 sized sheet. (Review should include your understanding of the novel, favorite character(s) and value(s) imbibed ). Upload the review on Google Classroom.

**Enid Blyton, Rabindranath Tagore, Rudyard Kipling , Roald Dahl, J K Rowling, ,  
Ruskin Bond, R K Narayan, Sudha Murthy**

**(Rubrics - Expression, Creativity and Presentation of ideas)**

- 2. POEM TIME :** Compose a poem of 8 lines on the themes allotted below and write it down on an A4 sized sheet with beautiful illustrations. Upload the same on Google Classroom.

- a. Nature /Environment ---- Roll no - 1-26**
- b. Compassion/Kindness --- Roll no 27 -- to the last roll no.**

**(Rubrics - Expression, Creativity & Illustration, Presentation of ideas)**

- 3. MASK MAKING :** Design a mask of your favourite animal/pet , click a picture wearing the same and upload it on Google Classroom .

**(Rubrics - Design,Creativity & Layout., Aesthetics)**

## कक्षा चौथी (2021-22) ग्रीष्मावकाश कार्य

### 1 वॉल हैंगिंग -

पशु-पक्षी हमारी प्रकृति का अभिन्न अंग हैं। किन्हीं पाँच पशु - पक्षियों के रंग बिरंगे cutout में उन की विशेषताएँ या रोचक तथ्य ( Interesting Facts) लिख कर Wall hanging बनाएँ।

### 2. कविता लेखन -

निम्नलिखित विषयों में से किसी एक विषय पर A 4 size शीट पर स्वरचित कविता लिखिए । साथ ही संबंधित चित्र भी बनाएँ ।

- प्रदूषण
- प्रकृति संरक्षण
- बिजली संरक्षण
- पानी बचाना

## SUMMER HOLIDAYS HOMEWORK

### CLASS 4

All the work has to be done in a thin notebook.

- Solve the following worksheet having three levels

#### LEVEL - 1

Q.1 Fill in the blanks:

- The successor of 49999 is \_\_\_\_\_
- The place value of 6 in 86,305 is \_\_\_\_\_.
- $27165 + \underline{\hspace{2cm}} = 34781 + \underline{\hspace{2cm}}$
- $19568 - 0 = \underline{\hspace{2cm}}$
- The result we get after subtraction is called \_\_\_\_\_.
- Largest 6 digit number  $+1 = \underline{\hspace{2cm}}$ .
- The period of 8 in the numeral 78,345 is \_\_\_\_\_
- $191 + 347 + \underline{\hspace{2cm}} = \underline{\hspace{2cm}} + 963 + 191$
- $\underline{\hspace{2cm}} - 36941 = 0$
- The numbers which are being added are called \_\_\_\_\_.
- Smallest 5 digit number  $- 100 = \underline{\hspace{2cm}}$ .
- $900 + 500 = \underline{\hspace{2cm}}$ .
- $16000 - 11000 = \underline{\hspace{2cm}}$ .
- $7235 + \underline{\hspace{2cm}} = 7235$ .
- The number name for the numeral 2,00,202 is \_\_\_\_\_

#### LEVEL - 2

Q.1 Solve the following questions :

- Write the period, place and place value of 7 in 187205
- Write down the numeral which is one more than the greatest 5 digit number.
- Arrange the following in ascending order:  
 $69,457 ; 50,869 ; 72,815 ; 42,795 ; 69,567$
- Make the largest and smallest number 5 digit number using 7,5,9,1,3 only once.
- Which numeral has more digits- greatest 5 digit numeral or smallest 6 digit numeral.

f) Find the sum of:

5,37,098 ; 4,444 and 39,349

g) Find the difference between:

21,561 and 9,45,672

h) In all India examination 25467 male candidates and 87652 female candidates appeared. Find the total number of candidates appeared for the examination.

i) Find the difference between the largest number of six digit and the smallest number of four digits.

j) In an election there are four candidates. They received 39456, 24947, 8675 and 978 votes respectively. How many total votes polled in all?

k) Subtract: 53,170 from 70,000

l) Arrange in columns and add:

31,244 ; 1,23,450 and 24,715

m) What number should be added to 32815 to make it 50000 ?

n) The sum of two numbers is 99 385. If one of them is 40,317 . Find the other.

o) Find the missing digits by using addition.

$$\begin{array}{r} 1822 \\ 2 \square 4 \\ \hline \square \square 1 \square \end{array}$$

### LEVEL - 3

Q.1 Solve the following questions:

i) Write 6,90,876 in expanded form in three different ways.

ii) Mira made a mistake .She was asked to write nine lakh nine thousand as a numeral.She wrote 990900 . What should be the correct numeral.

iii) Compare the place values of 3 in the given numeral 43032.

iv) Find the price of the car you have at your home.Write it in words as well as in figures.

v) Write the greatest 4 digit number using;

a) Only one digit

- b) All different digits  
 c) All different digits but 3 in hundreds place.
- vi) There are 4253 men, 7654 women and 1904 children in a city.  
 What is the total population of the city?
- vii) A factory produced 12306 and 20825 scooter parts in two months. It was noticed that 8729 parts were defective. How many parts were not defective?
- viii) Subtract 63 hundreds from 17 thousands
- ix) A shopkeeper has 27040 oranges. He sold 12285 on Monday and 9806 on Tuesday. How many oranges does he have now?
- x) The sum of two numbers is 48275. If one of them is 39 838. Find the other.
- xi) The population of a town is 82010. If 43413 are men, 25929 are Women and the remaining are children, find the number of Children in the town?
- xii) Reena subtracted 23789 from a number. The difference was 9805. What was the number she started with ?
- xiii) The cost of a scooter is ₹5685 more than the cost of a T.V . If the Cost of the T.V is ₹ 22643. Find the total cost of scooter and T.V.
- xiv) Write down the largest number and the smallest number of four digits in which no digit is repeated and also add them.
- xv) What must be subtracted from 6,25,983 to get 2,75,963 ?

• Fun time





Puzzle no.-1 Solve for question mark



Can you do it ?












Puzzle no.-2.

**Which number should replace the question mark ?**

<b>2</b>  <b>3      5</b>	<b>5</b>  <b>1      7</b>
<b>3</b>  <b>9      2</b>	<b>8</b>  <b>3      6</b>

Puzzle no.-3

Picture  
puzzle

	+		+		=	18
	+		+		=	14
	-		=	2		
	+		+		=	?

• ACTIVITY:

**Make a grid of 10 x 10 using cardboard and write numbers 1 to 100 on it. Laminate it or cover it with a cellophane sheet. Practice skip counting, quick addition and subtraction.**

1	11	21	31	41	51	61	71	81	91
2	12	22	32	42	52	62	72	82	92
3	13	23	33	43	53	63	73	83	93
4	14	24	34	44	54	64	74	84	94
5	15	25	35	45	55	65	75	85	95
6	16	26	36	46	56	66	76	86	96
7	17	27	37	47	57	67	77	87	97
8	18	28	38	48	58	68	78	88	98
9	19	29	39	49	59	69	79	89	99
10	20	30	40	50	60	70	80	90	100



**SUMMER HOLIDAY HOMEWORK**  
**SCIENCE**  
**CLASS IV**

**FLOWERS are the music of the ground,From the Earth's lips spoken without sound.In joy or sorrow,happiness or sadness,Flowers are our constant friends.**

**Ques 1. Spending time in Nature is quite relaxing. But there are certain things which we do not know about this wonderful creation of God.Explore and Research about different flowers and write five amazing facts about them.You can also draw their pictures and colour them.**

**Ques 2. Draw pictures of five winter and five summer fruits and colour them attractively.Also write the names of two fruits which are used for the following purposes:**

1. Fruits eaten as vegetables.
2. Fruits which are dried and eaten.
3. Fruits used to prepare pickles.
4. Fruits used to prepare jam and marmalade.

**Ques 3. Prepare your own homemade ROOM FRESHENER. Given below are the steps to prepare it at home and surprise everyone around.**

1. Take a few of your favourite flowers(rose,mogra).
2. Separate the petals.
3. Warm a cup of water and soak the petals inside that water.
4. Allow the water to cool and then keep it in the refrigerator for a few hours.
5. Put this water in a bottle with a sprayer attached to it on top.
6. Spray the water and enjoy the fragrance of the exotic flora.

**NOTE: Do question 1 and 2 on A4 coloured sheets. Prepare a nice cover page for these sheets and staple them together.**

## WORKSHEET

**Ques4.** Given below is a word grid having the names of various flowers. Find out the names of different flowers hidden in this grid.

L	S	T	M	A	R	I	G	O	L	D	E
A	R	N	I	C	A	B	A	N	A	N	A
V	N	K	G	H	D	B	N	D	M	D	D
E	D	E	R	A	F	F	L	E	S	I	A
N	F	O	T	M	Z	W	I	J	A	R	H
D	G	R	G	E	E	E	L	A	H	H	L
E	H	A	B	L	N	R	Y	S	J	G	I
R	O	S	E	I	I	T	R	M	A	J	A
F	J	K	N	Y	A	Y	W	I	N	L	K
D	K	J	T	F	A	U	E	N	D	K	L
S	Q	H	Y	G	Z	U	T	E	C	S	M

**Ques5.** Read the clues given below carefully and write the names of the flowers from the above grid in the space provided.

1. Two flowers which grow in the summer season. \_\_\_\_\_  
\_\_\_\_\_
2. Two flowers used to make perfumes. \_\_\_\_\_
3. Two flowers which grow in the winter season \_\_\_\_\_  
\_\_\_\_\_
4. Two flowers which are cooked and eaten as vegetables \_\_\_\_\_  
\_\_\_\_\_

5. Two flowers used to make colours. \_\_\_\_\_
6. Two flowers used as medicine. \_\_\_\_\_
7. The largest flower in the world. \_\_\_\_\_

Class IV  
Social Science  
Summer Holidays Homework

1. Prepare a colorful Pictionary with meanings of the words given below

Pictionary Words

1. Temporary House	15. Thematic Map
2. Permanent House	16. Compass
3. Biodegradable Waste	17. Sketch
4. Personal Communication ( any 2)	18. Indoor Game
5. Mass Communication ( any 2)	19. Outdoor Game
6. Rural Transport ( any 2)	20. Manual Labour
7. Skiing	21. Intellectual Labour
8. Trekking	22. Physical Features of India
9. Wildlife Tourism	23. Non-biodegradable Waste
10. Road Signs	24. Sign Language
11. Conventional Symbols	25. Five R's (reduce, reuse, refuse, recycle, repurpose)
12. Physical Map	26. Raw Material
13. political map	27. Continents
14. Urban Transport (any 2)	28. Oceans

2. Create a game according to your roll number (Leisure Time Ch 8)

Roll number	Chapter
1 - 10	Chapter 1,2,3
11 - 20	Chapter 4,5,6
21 - 30	Chapter 7,8,9
31 - 40	Chapter 11,12,13
41 Onwards	Chapter 8,10, 13

## Class 4 - Co Scholastics Home Work

### Ved Path Holidays Home Work

(I)

A-4 size sheet पर:-

- (a) ॐ का चित्र बनाओ
- (b) गायत्री मंत्र तथा उसका अर्थ लिखो
- (c) शिष्टाचार की 10 अच्छी बातें लिखो

(II)

निम्नलिखित महापुरुषों का जीवन पत्र लिखें -

- (a) महात्मा हंसराज
- (b) महात्मा गाँधी
- (c) रानी लक्ष्मी बाई

### Art Holidays Home Work

Complete page 1 to 20 of Step By Step

**DRAW & COLOUR THE IMAGE**  
**'YOU ARE SINGING ON STAGE'**



# MAKE A GUITAR WITH CARD BOARD



# SOLVE THE PUZZLE WITH MUSIC INSTRUMENTS

G	I	G	G	V	I	O	L	I	N
R	A	U	E	C	N	E	S	E	R
F	E	I	R	A	O	R	D	D	B
T	R	T	H	S	C	O	E	R	O
I	T	A	I	I	A	P	A	U	N
H	A	R	M	O	N	I	U	M	G
L	B	E	O	P	R	A	D	B	O
P	L	O	C	F	R	N	D	U	T
S	A	T	A	D	H	O	L	A	K
F	L	U	T	E	T	E	R	F	L



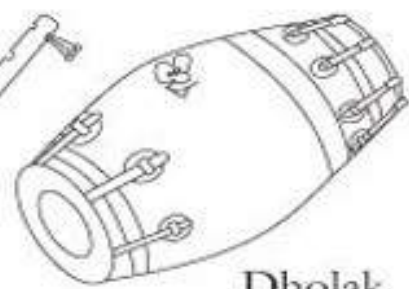
Violin



Bongo



Flute



Dholak



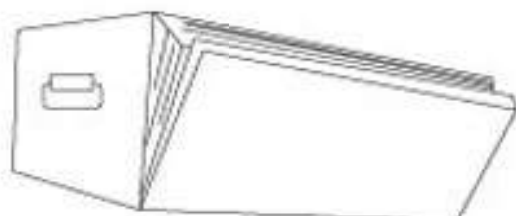
Drum



Casio



Guitar



Harmonium



Piano



Tabla