



DAV ISPAT PUBLIC SCHOOL

SECTOR – 2C (Junior Wing), BOKARO STEEL CITY, Jharkhand









Class – III

Date: 15.05.2025

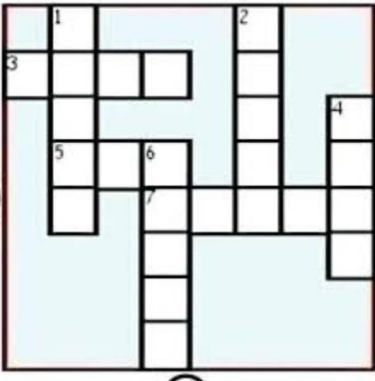
Summer Vacation Holiday Homework

Subject: ENGLISH

1. Make 1 bird or animal mask of your choice and bring when school reopens.
2. Take out the printout of this worksheet and complete it and submit after summer vacation.



OPPOSITES



ACROSS

3. opposite of short.....

5. opposite of old.....

6. opposite of goodbye.....

DOWN

1. opposite of square.....

2. opposite of big.....

4. opposite of bad.....

6. opposite of black.....

Subject: SCIENCE

- Q1) Draw the 5 sense organ and write their function in the science copy.
Q2) Paste the 5 different types of leaves and write their uses.
Q3) Read and learn lesson 1, 2 & 3.

Subject: Hindi

- 1.) पाठ 1 से 4 तक (भाषा माधुरी और भाषा अभ्यास) पूर्ण करें ।
- 2.) निबंध - पौष्टिक आहार
- 3.) पत्र - प्रधानाचार्य को एक दिन की छुट्टी के लिए आवेदन पत्र लिखें ।
- 4.) चार्ट पेपर द्वारा मॉडल बनाइए :-
 - क) संज्ञा तथा उसके भेद
 - ख) समान लय वाले शब्द

Subject: SOCIAL SCIENCE

1. Paste pictures of 2 food items that we get from plants and 2 from animals and write a few lines about them. (Do it in a thin copy, one side ruled & one side plan)
2. Make a balanced diet chart on a big size chart paper showing all the necessary requirements in our diet. Draw or paste the pictures of food items as sources of different nutrients.
3. Learn Chapter 1 and 2.

Class 3 Maths, Summer vacation assignment question

Here are some important questions from Class 3 DAV Maths, Chapter 1 and 2:

Chapter 1: Numbers Up to 9999

1. Write the number names for:

- 4567
- 2345

2. Identify the place value of each digit in:

- 1234
- 9876

3. Compare numbers using $>$, $<$, or $=$:

- 4567 _____ 4576
- 2345 _____ 2345

Chapter 2: Addition

1. Add the following numbers:

- $2345 + 1234 =$
- $4567 + 2789 =$

2. Solve word problems:

- Rohan has 1500 marbles. His friend gives him 800 more marbles. How many marbles does Rohan have now?
- A basket contains 456 apples. If 278 more apples are added, how many apples are there in total?

3. Fill in the blanks:

- $5 + \underline{\quad} = 12$
- $7 + 3 = \underline{\quad}$

Tips

1. Practice reading and writing numbers up to 9999.
2. Focus on place value and comparing numbers.
3. Build addition skills with regrouping and word problems.

FOLLOW THE TREES

Add then trace the bear's path to its cave. The bear follows trees with sum that have a 3 in the tens place. Colour the correct path with yellow colour.

